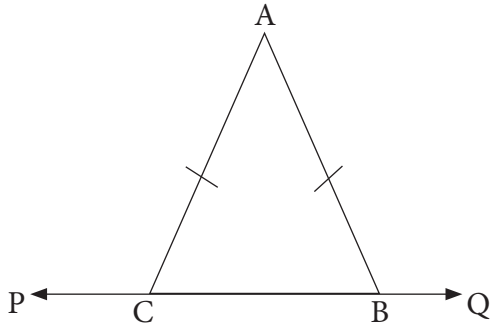


Triangles

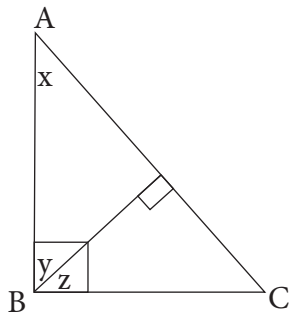
Q1. In the given isosceles $\triangle ABC$, $AB = AC$. Prove that $\angle ABQ = \angle ACP$.



Q2. Rajesh wants to construct an acute-angled triangle $\triangle PQR$, having $\angle P = 21^\circ$, $\angle Q = 67^\circ$ and $\angle R = 82^\circ$. Jyoti says that it cannot be constructed. Is Jyoti correct? Why, or why not?

Answer: _____

Q3. If $\angle ACB = 70^\circ$, find the unknown angles in the following figure:



$x =$ _____

$y =$ _____

$z =$ _____

Q4. The base angle of an isosceles triangle is four times its vertical angle. Find the measure of all the angles and identify the type of triangle.

Measure of each base angle = _____

Measure of vertical angle = _____

Type of triangle: _____

Q5. $\triangle PQR$ is a right-angled triangle such that c is the hypotenuse and a and b are the other two sides of the triangle. Find

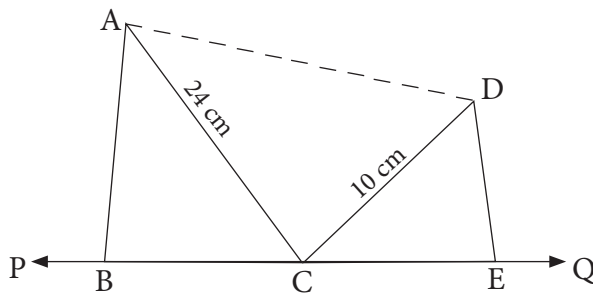
a. a , if $b = 7$ cm and $c = 25$ cm

$a =$ _____

b. c , if $b = 3$ cm and $a = 4$ cm

$c =$ _____

Q6. In the given figure $\angle ACD$ is twice of $\angle ACB$. $\angle ACB = \angle DCE$. If $AC = 24$ cm, $CD = 10$ cm, find the measure of AD . (Hint: Find the measure of $\angle ACD$.)



Answer: $AD =$ _____

Q7. Karim's father put up a slanting slide from the rooftop to the balcony. If the length of the slide is 25 m and distance from the wall to the base of the slide is 20 m, find the height of the wall.

Answer: _____

Q8. State True or False:

a. The exterior angle of a triangle is equal to the sum of any two opposite interior angles. _____

b. In a triangle, if all the angles are acute, then it is an acute-angled triangle. _____

c. In a triangle, if all the angles are obtuse, then it is an obtuse-angled triangle. _____

- d. The sides of a right-angled triangle are 10 cm, 11 cm and 12 cm. _____

Q9. Choose the correct option and fill in the blanks:

- a. A triangle having sides 20 cm, 15 cm and 25 cm is _____.
(i) acute-angled triangle (ii) right-angled triangle
- b. An altitude of a triangle divides it into two _____.
(i) right-angled triangles (ii) obtuse-angled triangle
- c. A median divides the opposite side of the vertex in the ratio _____.
(i) 1 : 2 (ii) 1 : 1
- d. Sum of any two sides of a triangle is _____ than the third side.
(i) smaller (ii) greater

Q10. The sides of a triangle are in the ratio 3 : 4 : 5. If the longest side is 10 cm long, find the measure of the other two sides. Identify the type of triangle formed:

- (i) On the basis of the measure of its sides
(ii) On the basis of the measure of its angles

Measure of the other two sides = _____, _____

Type of triangle on the basis of sides : _____

Type of triangle on the basis of angles : _____

Answers

1. Let $\angle ABC = x$, then $\angle ACB = x$.
 $\angle ACP = 180^\circ - x$; $\angle ABQ = 180^\circ - x$
So, $\angle ACP = \angle ABQ$
2. Jyoti is correct.
 $21^\circ + 67^\circ + 82^\circ = 170^\circ$, but sum of all the angles in a triangle should be equal to 180° .
3. $x = 20^\circ$; $y = 70^\circ$; $z = 20^\circ$
4. 30° , 120° , Obtuse-angled triangle
5. a. 24 cm; b. 5 cm
6. $AD = 26$ cm
7. 15 m
8. a. False; b. True; c. False; d. False
9. a. (ii); b. (i); c. (ii); d. (ii)
10. 6 cm, 8 cm; Scalene triangle; Right-angled triangle